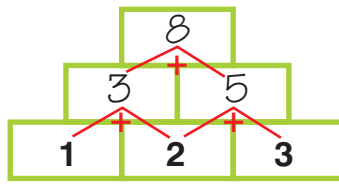
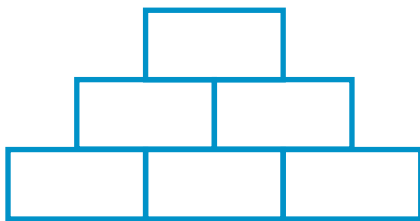


Mathe Online-Schule

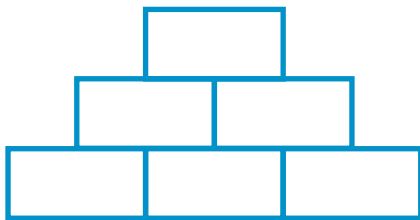
Zahlenmauern
Zahlenraum bis 20



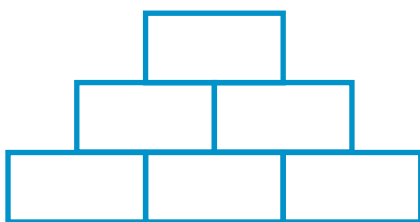
Setze die Zahlen richtig ein!



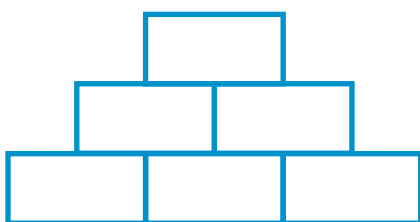
- 20
- 7
- 4
- 13
- 10
- 3



- 5
- 2
- 19
- 3
- 14
- 12



- 15
- 7
- 2
- 6
- 9
- 4



- 8
- 9
- 4
- 5
- 17
- 4