
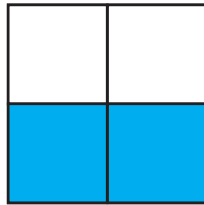


# Mathe Online-Schule

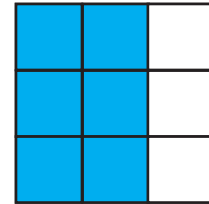
Schreibe den richtigen Bruch neben jedes Bild.




$$\frac{3}{4}$$




$$\frac{2}{4}$$



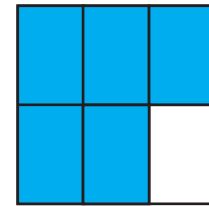
$$\frac{6}{9}$$



$$\frac{2}{2}$$



$$\frac{2}{3}$$



$$\frac{4}{6}$$



$$\frac{3}{6}$$



$$\frac{4}{5}$$



$$\frac{1}{6}$$



$$\frac{2}{4}$$



$$\frac{5}{8}$$



$$\frac{7}{12}$$