

# Rechenrätsel für Kinder - Symbolrechnen




1. Klasse






Jedes abgebildete Symbol bedeutet eine bestimmte Zahl (1-9).  
Versuche nun, die Berechnung sinnvoll zu lösen.


	+	5	=	7
---	---	---	---	---




	=
---	---


	+		=	
---	---	---	---	---



	=
---	---


	+		=	7
---	---	---	---	---

	=
---	---

	-		=	
---	---	---	---	---

	=
---	---


	+		=	
---	---	---	---	---

	=
---	---


# Lösung

Jedes abgebildete Symbol bedeutet eine bestimmte Zahl (1-9).  
Versuche nun, die Berechnung sinnvoll zu lösen.


2	+	5	=	7
---	---	---	---	---

	=	2
---	---	---


2	+	2	=	4
---	---	---	---	---

	=	4
---	---	---


4	+	3	=	7
---	---	---	---	---

	=	3
---	---	---

3	-	2	=	1
---	---	---	---	---

	=	1
---	---	---

1	+	4	=	5
---	---	---	---	---

	=	5
---	---	---