


# Rechenrätsel für Kinder - Symbolrechnen




1. Klasse




Jedes abgebildete Symbol bedeutet eine bestimmte Zahl (1-10).  
Versuche nun, die Berechnung sinnvoll zu lösen.

2	+		=	6
---	---	---	---	---




	=	
---	---	--


	-		=	
---	---	---	---	---




	=	
---	---	--


	-		=	7
---	---	---	---	---

	=	
---	---	--

	+		=	
---	---	---	---	---

	=	
---	---	--

	+		=	
---	---	---	---	---

	=	
---	---	--

# Lösung

Jedes abgebildete Symbol bedeutet eine bestimmte Zahl (1-9).  
Versuche nun, die Berechnung sinnvoll zu lösen.

$$\boxed{2} + \boxed{4} = \boxed{6}$$

$$\boxed{\img alt="yellow bird" data-bbox="715 345 795 385}} = \boxed{4}$$

$$\boxed{8} - \boxed{4} = \boxed{4}$$

$$\boxed{\img alt="green apple" data-bbox="715 460 790 510}} = \boxed{8}$$

$$\boxed{8} - \boxed{1} = \boxed{7}$$

$$\boxed{\img alt="beach ball" data-bbox="720 580 790 630}} = \boxed{1}$$

$$\boxed{1} + \boxed{4} = \boxed{5}$$

$$\boxed{\img alt="blue balloon" data-bbox="720 695 780 755}} = \boxed{5}$$

$$\boxed{5} + \boxed{5} = \boxed{10}$$

$$\boxed{\img alt="red ladybug" data-bbox="715 810 780 865}} = \boxed{10}$$