

Rechenrätsel für Kinder - Symbolrechnen

1. Klasse




Jedes abgebildete Symbol bedeutet eine bestimmte Zahl (1-9).
Versuche nun, die Berechnung sinnvoll zu lösen.


8	-		=	
---	---	---	---	---



	=	
---	---	--

	+		=	9
---	---	---	---	---


	=	
---	---	--

	-		=	
---	---	---	---	---

	=	
---	---	--

8	-		=	
---	---	---	---	---

	=	
---	---	--

	-		=	
---	---	---	---	---

	=	
---	---	--


Lösung

Jedes abgebildete Symbol bedeutet eine bestimmte Zahl (1-9).
Versuche nun, die Berechnung sinnvoll zu lösen.


8	-	4	=	4
---	---	---	---	---

	=	4
---	---	---

4	+	5	=	9
---	---	---	---	---

	=	5
---	---	---

5	-	4	=	1
---	---	---	---	---

	=	1
---	---	---

8	-	1	=	7
---	---	---	---	---

	=	7
---	---	---

7	-	5	=	2
---	---	---	---	---

	=	2
---	---	---