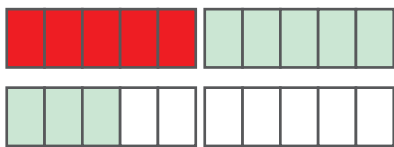
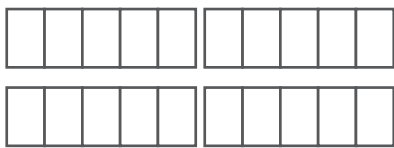


Schrittweise Addition ZR 20

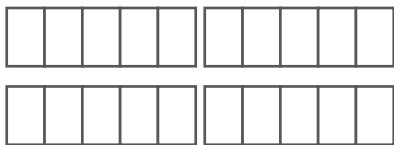
Rechne schrittweise
über den Zehner.

$$6 + 5 = 11$$
$$6 + 4 + 1 =$$
$$10 + 1 = 11$$



$$5 + 8 = \square$$
$$\square + \square + \square =$$
$$\square + \square = \square$$



$$7 + 7 = \square$$
$$\square + \square + \square =$$
$$\square + \square = \square$$



$$8 + 3 = \square$$
$$\square + \square + \square =$$
$$\square + \square = \square$$



$$9 + 6 = \square$$
$$\square + \square + \square =$$
$$\square + \square = \square$$