

Mathe Online-Schule

Rechnen und malen

Male die Kästchen an!



$$\boxed{1} + \boxed{3} = \boxed{4}$$

Male die Kästchen an!



$$\boxed{2} + \boxed{2} = \boxed{}$$

Male die Kästchen an!



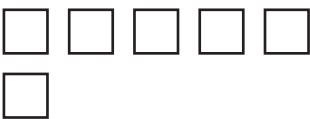
$$\boxed{3} + \boxed{2} = \boxed{}$$

Male die Kästchen an!



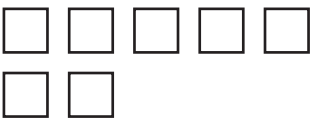
$$\boxed{1} + \boxed{2} = \boxed{}$$

Male die Kästchen an!




$$\boxed{4} + \boxed{2} = \boxed{}$$

Male die Kästchen an!



$$\boxed{3} + \boxed{4} = \boxed{}$$

Male die Kästchen an!



$$\boxed{4} + \boxed{1} = \boxed{}$$