


# Mathe Online-Schule

Addieren bis 20. Berechne!




$$15 + 1 = \square$$



$$10 + 5 = \square$$




$$9 + 9 = \square$$




$$14 + 3 = \square$$




$$8 + 9 = \square$$



$$7 + 12 = \square$$



$$13 + 6 = \square$$



$$11 + 7 = \square$$



$$9 + 6 = \square$$