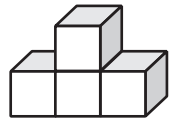


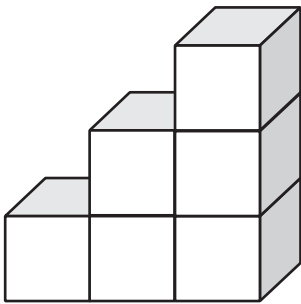
# Mathe Online-Schule

## Würfelgebäude und der richtige Bauplan

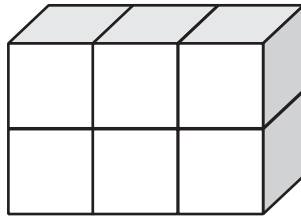
Wie viele Würfel siehst du in jeder Spalte?  
Schreibe die richtige Anzahl in das Kästchen unten!



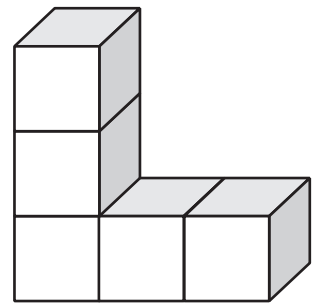
1	2	1
---	---	---



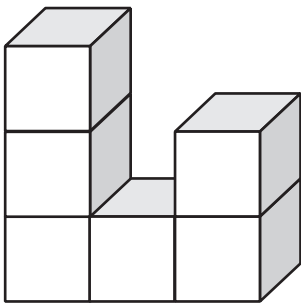
--	--	--



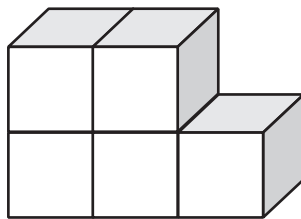
--	--	--



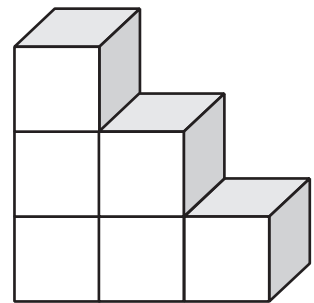
--	--	--



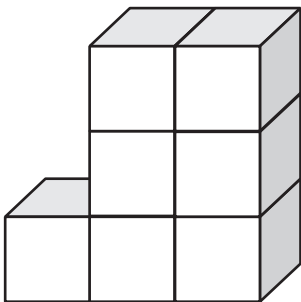
--	--	--



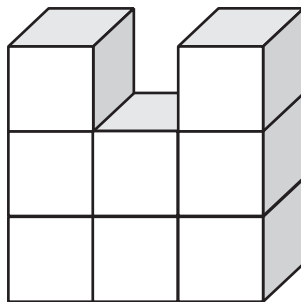
--	--	--



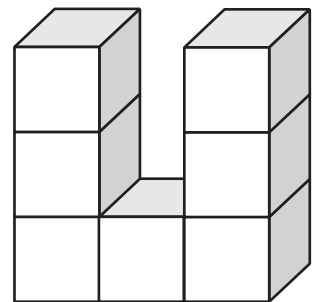
--	--	--



--	--	--



--	--	--



--	--	--