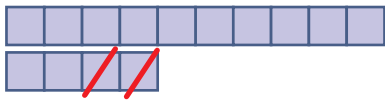


Subtraktion ZR 20

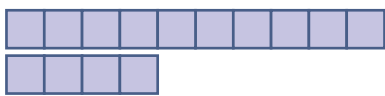
Streiche die Kästchen durch und berechne!



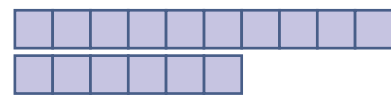
$$14 - 2 = \square$$



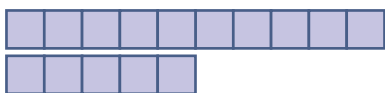
$$12 - 7 = \square$$



$$14 - 6 = \square$$




$$16 - 6 = \square$$



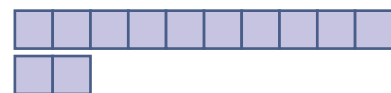
$$15 - 3 = \square$$



$$11 - 5 = \square$$



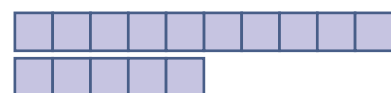
$$18 - 7 = \square$$



$$12 - 3 = \square$$



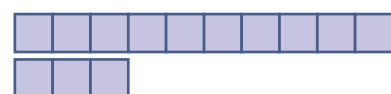

$$16 - 4 = \square$$



$$15 - 7 = \square$$



$$18 - 8 = \square$$



$$13 - 9 = \square$$