


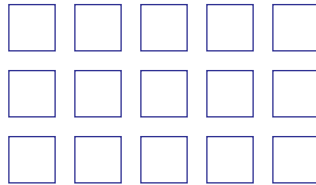
Mathe Online-Schule

Kannst du die richtige Anzahl von Kästchen ausmalen?

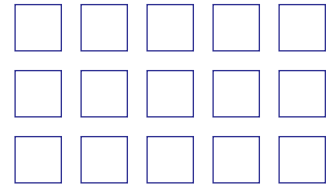
5




7



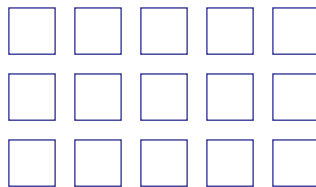
12




4



8



1



Schreibe das Ergebnis auf!



$$3 + 4 = \square$$



$$3 + 3 = \square$$



$$4 + 2 = \square$$



$$4 + 1 = \square$$



$$2 + 7 = \square$$



$$2 + 3 = \square$$