
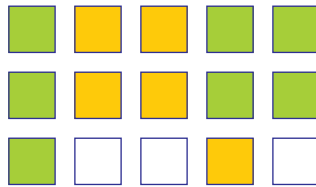


Mathe Online-Schule

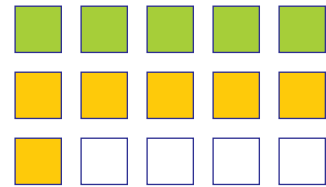
Zähle immer gleichfarbige Quadrate! Wie viele gelbe Quadrate und wie viele grüne Quadrate gibt es?




 4  _____



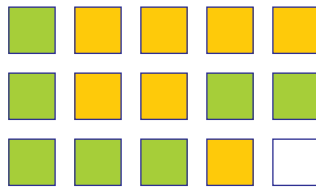
 _____  _____



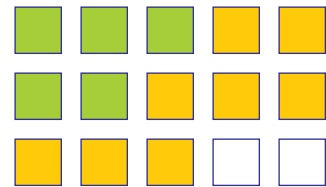
 _____  _____



 _____  _____



 _____  _____



 _____  _____

Schreibe das Ergebnis auf!



$3 + 4 = \underline{\hspace{2cm}}$



$4 + 5 = \underline{\hspace{2cm}}$



$1 + 6 = \underline{\hspace{2cm}}$



$2 + 3 = \underline{\hspace{2cm}}$



$6 + 4 = \underline{\hspace{2cm}}$