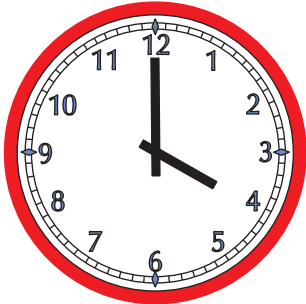


# Mathe Online-Schule

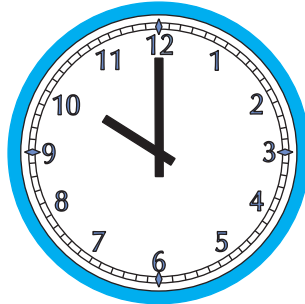
## Wie spät ist es?

Trage die Uhrzeiten in beiden Schreibweisen ein




4:00 Uhr

16:00 Uhr




\_\_\_\_\_ Uhr

\_\_\_\_\_ Uhr




\_\_\_\_\_ Uhr

\_\_\_\_\_ Uhr




\_\_\_\_\_ Uhr

\_\_\_\_\_ Uhr




\_\_\_\_\_ Uhr

\_\_\_\_\_ Uhr




\_\_\_\_\_ Uhr

\_\_\_\_\_ Uhr



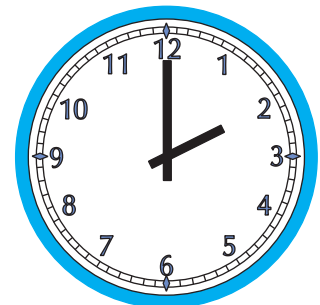
\_\_\_\_\_ Uhr

\_\_\_\_\_ Uhr



\_\_\_\_\_ Uhr

\_\_\_\_\_ Uhr



\_\_\_\_\_ Uhr

\_\_\_\_\_ Uhr