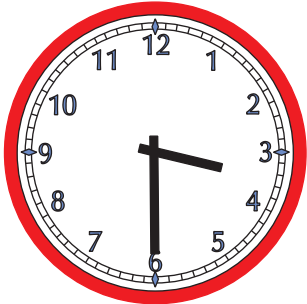


Mathe Online-Schule

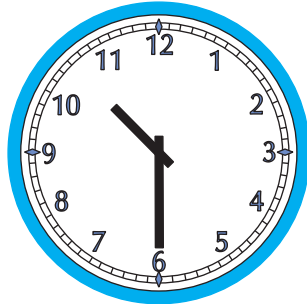
Wie spät ist es?

Trage die Uhrzeiten in beiden Schreibweisen ein




3:30 Uhr

15:30 Uhr




10:30 Uhr

 Uhr




 Uhr

 Uhr



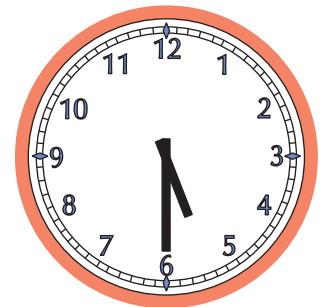
 Uhr

 Uhr




 Uhr

 Uhr




 Uhr

 Uhr



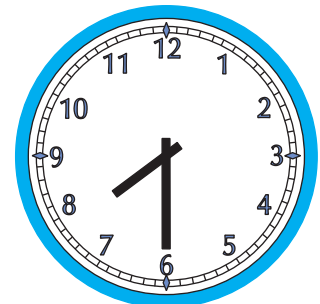
 Uhr

 Uhr



 Uhr

 Uhr



 Uhr

 Uhr